

PAPER-1 (B.E. / B.TECH)

QUESTIONS & SOLUTIONS

Reproduced from Memory Retention

 17 March, 2021

SHIFT-2

 03:00 pm to 06:00 pm



Duration : 3 Hours

Max. Marks : 300

SUBJECT - PHYSICS

JEE MAIN - (JANUARY) 2021 RESULT

VPA Students Repeats the Dominance of Vidyapeeth Academy
Students with 99 percentile +



99.91 NTA Score
ROUNIK ROUSHAN

4 Years Classroom Program (till 10th)
Completed IIT Syllabus in his
Class 10th at Vidyapeeth Academy.



99.41 NTA Score
AADITYA GUPTA

2 Years Classroom Program



99.18 NTA Score
DIVYA RAJ

1 Year Classroom Program



99.02 NTA Score
PRANJAL ANIMESH

3 Years Classroom Program

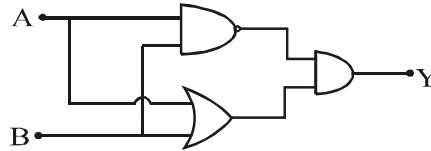
.....**Many more**

www.vidyapeethacademy.com

JEE(MAIN) 2021 (17 MARCH ATTEMPT) SHIFT-2

PHYSICS

1. What will be equivalent logic gate for the circuit.



- (1) AND (2) NAND (3) NOR (4) XOR

Ans. (4)

Sol. $Y = (\overline{A \cdot B}) \cdot (A + B)$

$$Y = (\overline{A} + \overline{B}) \cdot (A + B)$$

$$Y = \overline{A}A + \overline{A}B + \overline{B}A + \overline{B}B \Rightarrow Y = \overline{A}B + \overline{B}A$$

XOR gate

2. For a satellite at a distance $11R$ from the surface of a planet P of radius R its time period is 24 hrs.

Evaluate time period of another satellite at distance $2R$ from the surface of P.

Ans. 3.00

Sol. $T \propto R^{\frac{3}{2}}$

$$\frac{T_1}{T_2} = \left(\frac{R_1}{R_2}\right)^{\frac{3}{2}}$$

$$\frac{24}{T_2} = \left(\frac{12R}{3R}\right)^{\frac{3}{2}}$$

$$\frac{24}{T_2} = 8$$

$$T_2 = 3 \text{ hr}$$

3. A particle is moving along x-axis whose velocity is given by $v = v_0 + gt + ft^2$ (where g and f are constants). If at $t = 0$ particle is at $x = 0$ then the position of particle at $t = 1$ sec is given by.

- (1) $v_0 + \frac{g}{2} + \frac{f}{3}$ (2) $v_0 + g + f$ (3) $v_0 - \frac{g}{2} + \frac{f}{2}$ (4) $v_0 + g + 2f$

Ans. (1)

Sol. $\frac{dx}{dt} = v_0 + gt + ft^2$

$$\int_0^x dx = \int_0^t (v_0 + gt + ft^2) dt$$

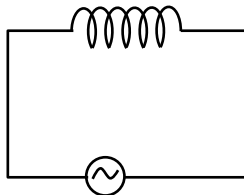
$$x = \left[v_0 t + \frac{gt^2}{2} + \frac{ft^3}{3} \right]_0^t$$

$$x = v_0 t + \frac{g}{2} t^2 + \frac{f}{3} t^3$$

4. In a pure inductive circuit effect on reactance and current when frequency is halved
- (1) reactance will be doubled and current will be halved
 - (2) current will be doubled and reactance will be halved.
 - (3) both doubled
 - (4) both halved

Ans. (2)

Sol.



$E_0 \sin \omega t$

$$\therefore x_L = 2\pi f \ell$$

$\therefore x_L$ will be halved.

$$I_0 = \frac{E_0}{x_L}$$

Current will be doubled.

5. 1 mole polyatomic gas with 2 vibration modes. If $\beta = \frac{C_P}{C_V}$, then β is:

- (1) 1.02 (2) 1.25 (3) 1.4 (4) 1.66

Ans. (2)

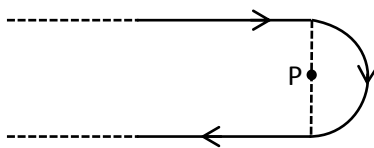
Sol. $f = 3 + 3 + 2 = 8$

$$C_P = \left(\frac{f}{2} + 1 \right) R$$

$$C_V = \frac{f}{2} R$$

$$\beta = \frac{C_P}{C_V} = \frac{f+2}{f} = \frac{8+2}{8} = \frac{5}{4} = 1.25$$

6. P is the centre of semi circular loop then magnetic field at P is.

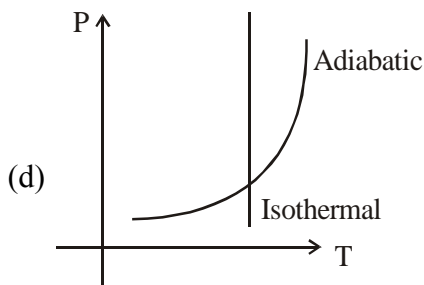
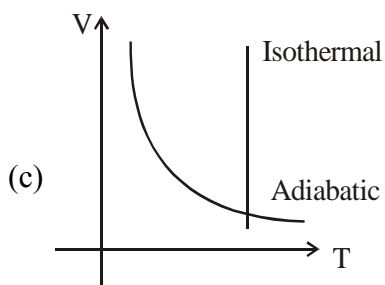
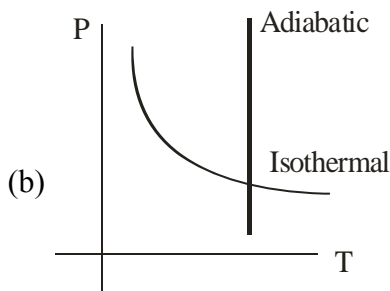
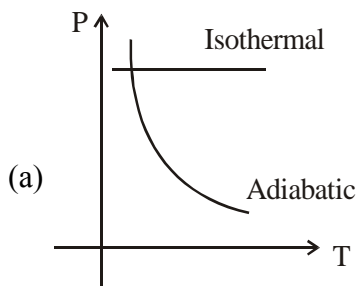


- (1) $\frac{\mu_0 I}{2\pi R} \times (2 + \pi)$ (2) $\frac{\mu_0 I}{2\pi R} (2 - \pi)$ (3) $\frac{\mu_0 I}{4\pi R} (2 + \pi)$ (4) $\frac{\mu_0 I}{4\pi R} (2 - \pi)$

Ans. (1)

Sol. $B = \frac{\mu_0 I}{4\pi R} \times 2 + \frac{\mu_0 I}{4R}$
 $= \frac{\mu_0 I}{4\pi R} [2 + \pi]$

7. Sample of gases are taken through isothermal and adiabatic process. Choose which of the following diagram correctly represent isothermal and adiabatic process.



- (1) a and c (2) b and d (3) c only (4) c and d

Ans. (4)

Sol. * Isothermal process means constant temperature which is only possible in graph (c) and (d)

* for Adiabatic process

$$pV^\gamma = \text{constant}$$

$$p^{1-\gamma} \cdot T^\gamma = \text{constant}$$

or $T \cdot V^{\gamma-1} = \text{constant}$

8. Find out electric flux (in $\frac{\text{N.m}^2}{\text{C}}$) passing through yz-plane with area $A = 0.4 \text{ m}^2$ and electric field

$$\vec{E} = \frac{2E_0}{5} \hat{i} + \frac{3E_0}{5} \hat{j}, \text{ where } E_0 = 4 \times 10^3 \text{ N/C}$$

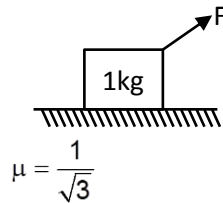
Ans. 640

Sol. $\vec{A} = 0.4 \hat{i}$, $\vec{E} = \frac{2E_0}{5} \hat{i} + \frac{3E_0}{5} \hat{j}$

$$\phi = \vec{E} \cdot \vec{A} = \frac{2E_0}{5} \times 0.4 = \frac{0.8}{5} \times 4 \times 10^3 = 640$$

9. A block of mass 1 kg on rough horizontal surface of friction coefficient $\mu = \frac{1}{\sqrt{3}}$ as shown in figure.

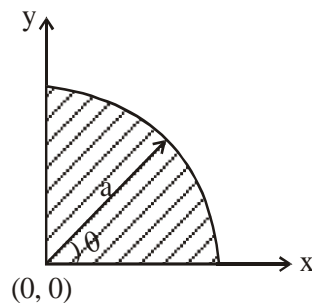
Find out F_{\min} so that it can slide on surface (in N)



Ans. 5.00

Sol. $F_{\min} = \frac{\mu mg}{\sqrt{L + \mu^2}} = \frac{\frac{1}{\sqrt{3}} \times 10}{\sqrt{L + \frac{1}{3}}} = 5\text{N}$

10. The diagram shows a quarter disc having uniform mass distribution. If coordinate of centre of mass is $(\frac{xa}{3\pi}; \frac{xa}{3\pi})$ then $x =$ _____

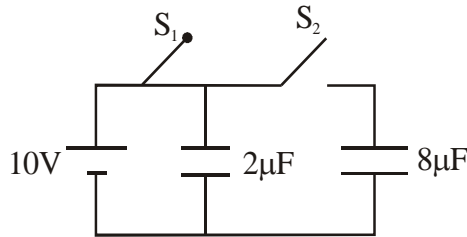


Ans. 4

Sol. Since it is a portion of half disc

$$\text{so } y_{\text{com}} = \frac{4a}{3\pi} \text{ similarly } x_{\text{com}} = \frac{4a}{3\pi}$$

11. A $2\mu\text{F}$ capacitor is charged with 10 volt cell. Now cell is removed and this capacitor is connected with uncharged $8\mu\text{F}$ capacitor. Find out final charge on $8\mu\text{F}$ capacitor.



- (1) $16\mu\text{C}$ (2) $8\mu\text{C}$ (3) $12\mu\text{C}$ (4) $2\mu\text{C}$

Ans. (1)

Sol.
$$v = \frac{C_1V_1 + C_2V_2}{C_1 + C_2} = \frac{2 \times 10 + 8 \times 0}{2 + 8} = 2 \text{ volt}$$

$$q = CV = 8 \times 2 = 16 \mu\text{C}$$

12. The potential energy of a particle moving in a circular path is given by $U = U_0r^4$ where r is the radius of circular path. Assume Bohr model to be valid. The radius of n^{th} orbit is $r \propto n^{1/\alpha}$ where α is :

Ans. 3.00

Sol.
$$\vec{F} = -\frac{dU}{dr} \hat{r} = -4U_0r^3 \hat{r}$$

$$\frac{mv^2}{r} = 4U_0r^3 \Rightarrow mv^2 = 4U_0r^4$$

$$mvr = \frac{nh}{2\pi} \Rightarrow m\sqrt{\frac{4U_0}{m}} r^2 \cdot r = \frac{nh}{2\pi}$$

$$r \propto n^{1/3}$$

$$\alpha = 3$$

13. Two equal masses A & B are connected to two different springs of spring constants k_1 & k_2 respectively. They are performing SHM such that they have same maximum velocities, then find the ratio of their amplitudes.

- (1) $\sqrt{\frac{k_2}{k_1}}$ (2) $\sqrt{\frac{k_1}{k_2}}$ (3) $\frac{k_1}{k_2}$ (4) $\frac{k_2}{k_1}$

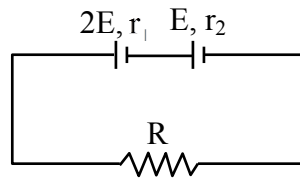
Ans. (1)

Sol.
$$A_1 \omega_1 = A_2 \omega_2$$

$$A_1 \sqrt{\frac{k_1}{m}} = A_2 \sqrt{\frac{k_2}{m}}$$

$$\frac{A_1}{A_2} = \sqrt{\frac{k_2}{k_1}}$$

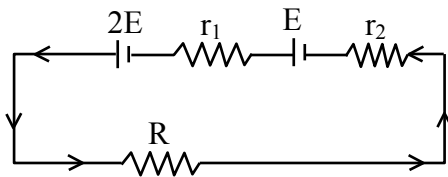
14. Internal resistance of battery of EMF $2E$ is r_1 and battery of EMF E is r_2 . If potential difference across the battery of EMF $2E$ is zero then value of R is :



- (1) $\frac{r_2}{2} - r_1$ (2) $\frac{r_1}{2} - r_2$ (3) $\frac{r_1}{2} + r_2$ (4) $\frac{r_2}{2} + r_1$

Ans. (2)

Sol.



$$2E - Ir_1 = 0$$

$$3E = IR_{\text{eq}}$$

$$3E = I(R + r_1 + r_2)$$

$$3E = \frac{2E}{r_1}(R + r_1 + r_2), \quad \frac{3r_1}{2} = R + r_1 + r_2$$

$$R = \left(\frac{r_1}{2} - r_2 \right)$$

15. Visible light is found in which spectrum

- (1) Lyman series (2) Balmer series (3) Paschen series (4) Pfund series

Ans. (2)

16. For a block at height 2 km from the base of a pond $\frac{\Delta V}{V}$ is 1.36%. Density of liquid is 1000 kg/m^3 and $g = 9.8 \text{ ms}^{-2}$. Evaluate (hydraulic stress/ hydraulic strain).

- (1) $14.41 \times 10^5 \text{ N/m}^2$ (2) $1.41 \times 10^5 \text{ N/m}^2$ (3) $17 \times 10^6 \text{ N/m}^2$ (4) $1.7 \times 10^6 \text{ N/m}^2$

Ans. (1)

Sol. Hydraulic stress = ρgh

$$= 1000 \times 9.8 \times 2$$

$$\text{Hydraulic strain} = \frac{1.36}{100}$$

$$\Rightarrow \frac{\text{stress}}{\text{strain}} = \frac{19.6 \times 1000 \times 100}{1.36}$$

$$= 14.41 \times 10^5 \text{ N/m}^2$$

17. Match the phase of voltage and current given in column II with the circuit given in column I.

Column I

- (a) Pure inductive circuit
- (b) Pure capacitive circuit
- (c) Series LCR circuit
- (d) Pure resistive circuit

Column II

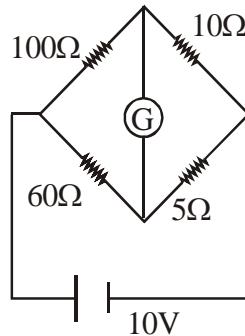
- (i) Current lags by $\frac{\pi}{2}$
- (ii) Current leads by $\frac{\pi}{2}$
- (iii) current and voltage are in same phase
- (iv) $\phi = \tan^{-1}\left(\frac{X_L - X_C}{R}\right)$

- (1) a – (iv); b – (ii); c – (i); d – (iii)
- (2) a – (iii); b – (ii); c – (iv); d – (i)
- (3) a – (i); b – (iii); c – (iv); d – (ii)
- (4) a – (i); b – (ii); c – (iii); d – (iv)

Ans. (4)

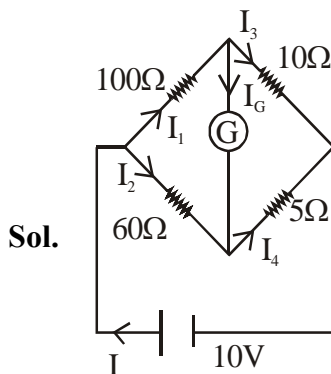
Sol. Theoretical.

18. In given circuit galvanometer is ideal then find out current through galvanometer.



- (1) 9.4 mA
- (2) 10.4 mA
- (3) 6.5 mA
- (4) 5.4 mA

Ans. (1)



$$R_{eq} = \frac{100 \times 60}{160} + \frac{10 \times 5}{15}$$

$$R_{eq} = 40.833$$

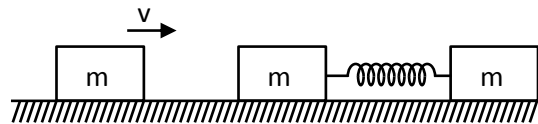
$$I = \frac{10}{40.833} = 0.2448A$$

$$I_1 = \frac{I \times 60}{160} = \frac{3I}{8} = 0.091A$$

$$I_3 = \frac{I \times 5}{15} = \frac{I}{3} = 0.0816$$

$$I_G = 0.0094 A = 9.4 \text{ mA}$$

19. Two blocks of mass 'm' each are connected by an ideal spring and are kept on a smooth horizontal surface with the spring in its natural length. Another block of mass 'm' moving with speed 'v' collides with spring-block system, then find maximum compression in spring in subsequent motion.



(1) $\sqrt{\frac{m}{2k}}v$

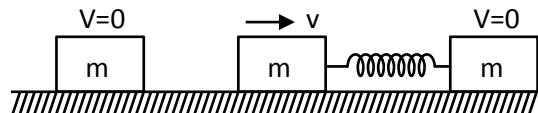
(2) $\sqrt{\frac{mv}{2k}}$

(3) $\sqrt{\frac{m}{2kv}}$

(4) $\sqrt{\frac{mv}{k}}$

Ans. (1)

Sol. Assuming elastic collision, just after collision,



$$\frac{1}{2}kx_{max}^2 = \frac{1}{2}\mu v_{rel}^2$$

$$\frac{1}{2}kx_{max}^2 = \frac{1}{2} \frac{m}{2} v^2$$

$$x_{max} = \sqrt{\frac{m}{2k}} v$$

& only option dimensionally correct is (A)

20. A particle is dropped from a height of 5 m above ground. The consecutive height attained after each collision is $\frac{81}{100}$ of previous collision. Find average speed of ball. ($g = 10 \text{ m/s}^2$)

(1) 3.0

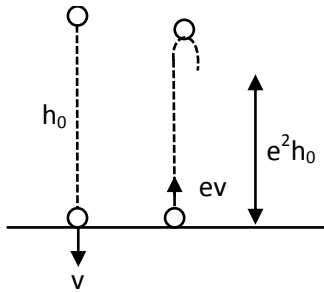
(2) 2.5

(3) 2.0

(4) 3.5

Ans. (2)

Sol.



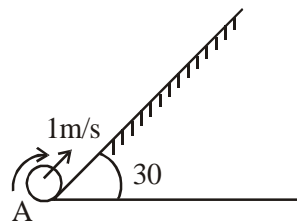
$$e^2 h_0 = \frac{81}{100} h_0 \Rightarrow e = 0.9$$

$$\begin{aligned} \text{Distance} &= h_0 + 2e^2 h_0 + 2e^4 h_0 + \dots \\ &= h_0 + 2e^2 h_0 (1 + e^2 + \dots) \\ &= h_0 + 2e^2 h_0 \left(\frac{1}{1-e^2} \right) = h_0 \left[\frac{1+e^2}{1-e^2} \right] \end{aligned}$$

$$\begin{aligned} \text{time} &= \sqrt{\frac{2h_0}{g}} + 2e\sqrt{\frac{2h_0}{g}} + 2e^2\sqrt{\frac{2h_0}{g}} + \dots \\ &= \sqrt{\frac{2h_0}{g}} [1 + 2e + 2e^2 + \dots] = \sqrt{\frac{2h_0}{g}} \left[1 + 2e \left(\frac{1}{1-e} \right) \right] \\ &= \sqrt{\frac{2h_0}{g}} \left(\frac{1+e}{1-e} \right) \end{aligned}$$

$$\begin{aligned} \text{Avg speed} &= \frac{h_0 \left(\frac{1+e^2}{1-e^2} \right)}{\sqrt{\frac{2h_0}{g}} \left(\frac{1+e}{1-e} \right)} = \sqrt{\frac{gh_0}{2}} \frac{(1+e^2)(1-e)}{(1-e^2)(1+e)} \\ &= 5 \frac{(1.81)(0.1)}{(0.19)(1.9)} = 2.50 \end{aligned}$$

21. A solid sphere of mass 2 kg and radius 0.5 m is projected from point A on a rough inclined plane as shown in figure. If it rolls without sliding find the time taken to reach again at A



- (1) 0.56 sec (2) 1.13 sec (3) 0.47 sec (4) 0.35 sec

Ans. (1)

Sol.
$$a = \frac{g \sin \theta}{1 + \frac{I}{mR^2}} = \frac{10 \times \frac{1}{2}}{\left(1 + \frac{\frac{2}{5}mR^2}{mR^2}\right)} = \frac{25}{7} \text{ m/s}^2$$

$$t_{\text{up}} = \frac{u}{a} = \frac{1}{\frac{25}{7}} = \frac{7}{25} \text{ sec}$$

$$t_{\text{up}} = t_{\text{down}} \Rightarrow T = 2t = \frac{14}{25} \text{ sec} = 0.56 \text{ sec}$$

22. A carrier $y_c = A_c \sin \omega_c t$ modulates a message signal $y_m = A_m \sin \omega_m t$. Evaluate its linear band width whose $\omega_m = 1.57 \times 10^8 \text{ rad/s}$
- (1) $19.72 \times 10^8 \text{ Hz}$ (2) $19.72 \times 10^6 \text{ Hz}$ (3) 10^8 Hz (4) $5 \times 10^6 \text{ Hz}$

Ans. (3)

Sol. Band width = $(1.57 \times 10^8)2$

23. A wave is travelling in possible x-direction with speed 300 m/s and frequency 239 Hz. Its maximum distance travelled by a point during to and fro motion is 6 cm. Find out equation of wave on a string.
- (1) $y = 0.06 \sin (5.1 x - 1.5 \times 10^3 t)$ (2) $y = 0.03 \sin (5.1 x + 1.5 \times 10^3 t)$
 (3) $y = 0.06 \sin (5.1 x + 1.5 \times 10^3 t)$ (4) $y = 0.03 \sin (5.1 x + 1.5 \times 10^3 t)$

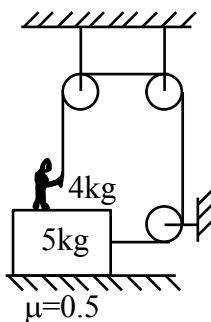
Ans. (1)

Sol. $A = 30 \text{ cm} = 0.6 \text{ m}$

$$K = \frac{1500}{239} = 5.1/\text{m}$$

$$y = 0.06 \sin (5.1 x - 1.5 \times 10^3 t)$$

24. Find the minimum value of force (in N) man should apply so that block can move :



Ans. 30.00

Sol. $T + N_1 = 4g$

$$N_2 = N_1 + 5g$$

$$T = f\ell$$

$$T = 0.5(4g - T + 5g)$$

$$1.5T = 0.5 \times 9g$$

$$T = 3g = 30N$$

25. If Electric field at a distance 3m from 100 watt bulb is E then Electric field at 3m from 60 watt bulb

is $\sqrt{\frac{x}{5}}E$. Find the value of x.

Ans. 3.00

Sol. $\frac{\rho}{4\pi r^2} \propto E^2$ _____(1)

$$\frac{\rho_1}{\rho_2} = \frac{E_1^2}{E_2^2}$$

$$\frac{100}{60} = \frac{E_1^2}{E_2^2}$$

$$\therefore E_2 = \sqrt{\frac{3}{5}} E$$

26. Initial amplitude of block of mass 1 kg undergoing damped oscillation is 12 cm. If amplitude at $t = 20$ minutes is $A = 6$ cm then find the value of damping constant. (in SI units)

(1) 1.16×10^{-3} (2) 1.15×10^{-3} (3) 1.13×10^{-3} (4) 1.12×10^{-3}

Ans. (1)

Sol. $A = A_0 \times e^{-bt/2m}$

$$6 = 12 \times e^{-bt/2}$$

$$\ln 2 = bt/2$$

$$b = 1.16 \times 10^{-3} \text{ kg/s.}$$

27. Coming soon.

28. Coming soon.

29. Coming soon.

30. Coming soon.